

We strongly recommend that you read about a topic before it is covered in lectures.

Lecture Date	Topics Covered	Reading from Giancoli
#23 Mon 4/8	Review Exam 2.	
Wed 4/10	Exam 2 covering assignments 4, 5 & 6, and all material covered in the reading assignments and in lectures through Mon 4/1 (last names A-K in 26-100, L-Z in Walker)	
#24 Fri 4/12	Transformers - Car Coils RC Circuits	Sect. 26-4, 26-5 & 29-6
#25 Wed 4/17	Driven LRC circuits - Resonance Metal Detectors (beach/airport)	Chapter 31 through Sect. 31-6 <i>Lecture Supplement</i>

Due before 4 PM, Wednesday, April 17 in 4-339B.

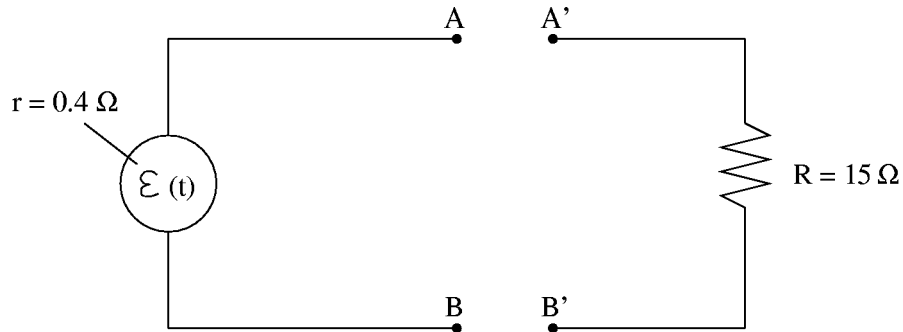
Problem 7.1

Ideal transformer.
Giancoli 29-42.

Problem 7.2

A transformer for impedance matching.

The generator in the diagram has an internal resistance r of $0.4\ \Omega$ and produces an EMF between the points A and B of $\mathcal{E}(t) = 150 \cos(\omega t)$ (in volts), with $\frac{\omega}{2\pi} = 50\ \text{Hz}$.



- (a) If the load resistor $R = 15\ \Omega$ (with A connected to A' , and B to B'), what average power will be delivered to the load?

The maximum power is delivered to a load when the load “impedance” (in this case the resistance R) is equal to the generator impedance (resistance r). In our case, $R \gg r$. However, the load and generator impedances can be matched by connecting a transformer between the terminals AB (primary side of the transformer with N_1 windings) and $A'B'$ (secondary side of the transformer with N_2 windings).

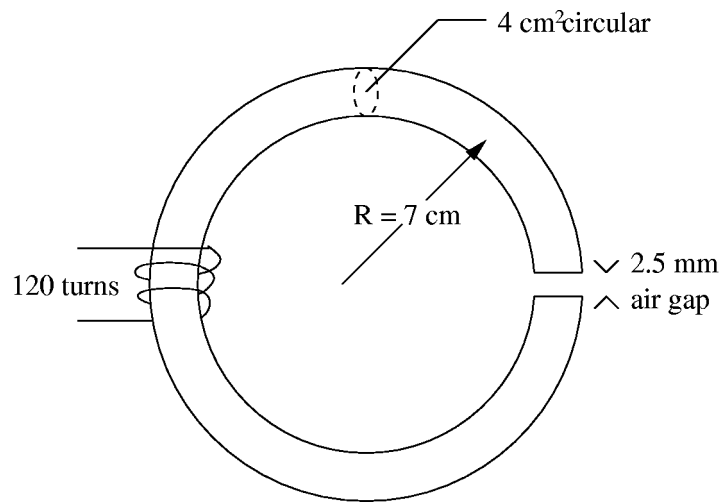
- (b) What should the ratio $\frac{N_1}{N_2}$ be for an ideal transformer so that there will be a maximum transfer of power to the load R ?
- (c) How much power is then delivered to the load?

Problem 7.3
RC circuit.
 Giancoli 26-45.

Problem 7.4
RC circuit.
 Giancoli 26-46.

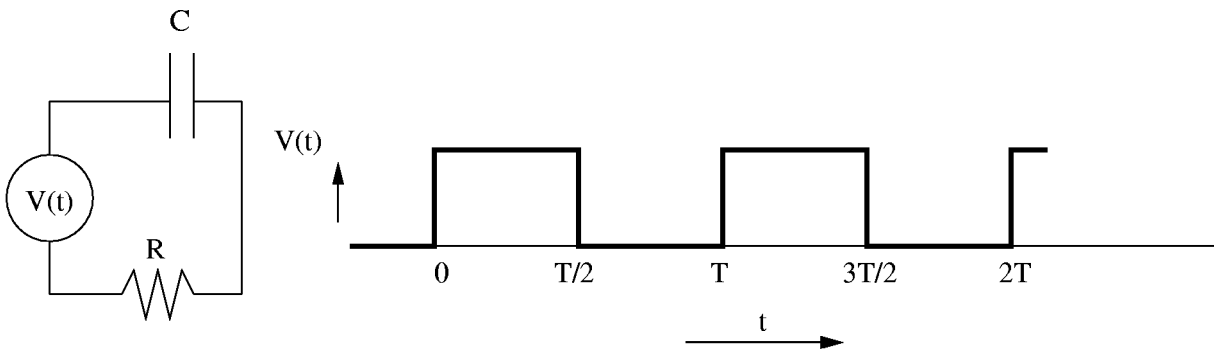
Problem 7.5
Electromagnet with small air gap.

An electromagnet has a steel core ($\kappa_M \approx 2500$) with an approximately circular cross sectional area of 4 cm^2 . The radius of the magnet is 7 cm ; there is a small air gap of only 2.5 mm (see sketch). The current through the magnet's 120-turn coil is 15 A . What will the magnetic field strength be (approximately) inside the air gap?



Problem 7.6
RC Circuit.

A series RC circuit (see left diagram below) is driven by a periodic square wave voltage $V(t)$ with a period $T = 0.3 \text{ sec}$ (see right diagram). $V(t) = 0 \text{ V}$ for $t < 0$; after $t = 0$, the voltage alternates between 15 V and 0 V ; $R = 40 \Omega$, $C = 150 \mu\text{F}$. We will call the voltages across the capacitor and the resistor $V_C(t)$ and $V_R(t)$, respectively.



- Calculate the current $I(t)$ in the circuit, the voltage $V_C(t)$, and the power delivered by the driving source as a function of time for the first full period ($0 < t < T$).
- Sketch in **one graph** $V(t)$, $V_C(t)$, and $V_R(t)$ in the time interval $0 < t < 2T$.

(c) How much energy is dissipated in the resistor during one period?

Hint: $RC \ll T$, thus $e^{(-T/2RC)} \ll 1$.

Recitations.

There are 28 recitation sections (see the 8.02 Website). If *for any reason* you want to change section, please see Maria Springer in 4-352.