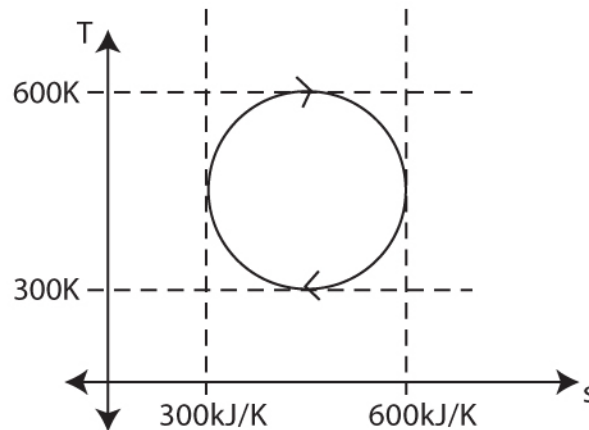
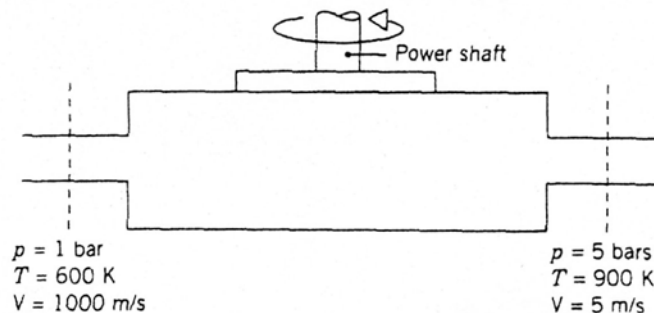


Do all three problems. All problems count the same.

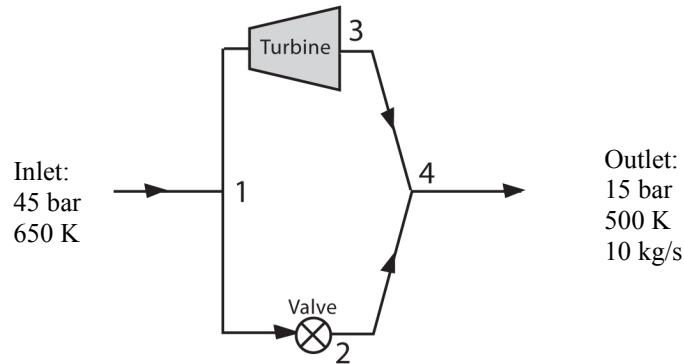
1. A reversible cycle plots as a perfect circle on a T - S diagram with maximum and minimum temperatures 600 K and 300 K and a maximum and minimum entropy of 600 kJ/K and 300 kJ/K.



- a) What is the net work of this cycle?
 - b) Indicate the path in the cycle along which heat is rejected. How do you know? (A sentence or two is required, perhaps bolstered by an equation).
 - c) What is the thermodynamic efficiency of this cycle?
2. The following device operates at steady-state and is well insulated. Air enters at one location and exits at another with a mass flow rate of 10 kg/s. Assuming ideal gas behavior and negligible potential energy effects, determine the direction of the air flow and the direction of the power flow. Determine the power in kW. Assume $c_p=1000$ J/kgK for air. (Hint: it might be useful to initially assume directions of the different energy fluxes and then to check for consistency.)



3. The figure below shows a throttling valve in parallel with a turbine having an isentropic efficiency of 90%. Both turbine and throttle operate at steady state and heat transfer with the surroundings and kinetic and potential energy effects can be neglected. You may assume the working fluid has a constant $c_p=1 \text{ kJ/kgK}$ and a ratio of specific heats of $\gamma=1.4$.



- Sketch the throttling process from state 1 to state 2 in a T-s diagram. Indicate the curves of pressures p_1 and p_2 in the diagram.
- Determine the pressure drop $\Delta p = p_1 - p_2$ across the throttle and the temperature at throttle exit T_2 .
- Sketch the expansion through the turbine on the same T-s diagram and indicate the curve of pressure p_3 .
- Determine the temperature at the turbine exit T_3 .
- Sketch processes 3 to 4 and 2 to 4 in the same T-s diagram. Explain in a sentence or two what happens during these processes.
- What is the mass flow rate through the turbine in kg/s? (Hint: you may want to define an appropriate control volume that includes the turbine exit flow, the throttle exit flow and the flow at the system outlet.)
- What is the power developed by the turbine?